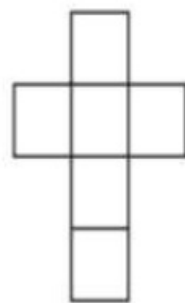
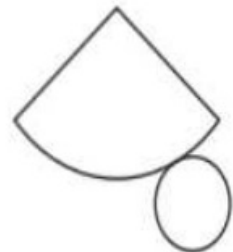
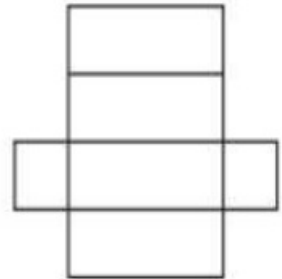
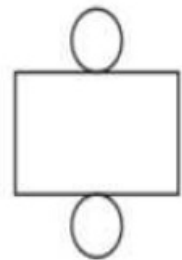
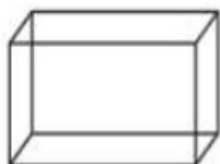
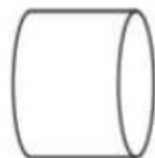
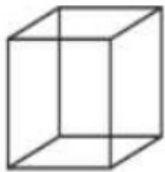
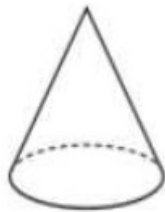
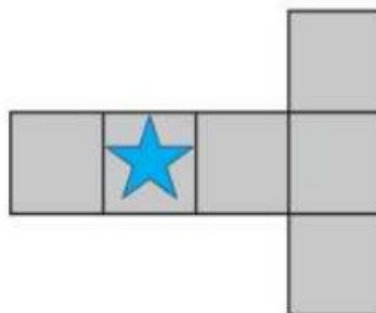


Q2) Angelique cuts and unfolds four containers to make flat shapes.

Draw lines to join the containers to the flat shapes they make.



Q4) Mia makes a cube from this net.

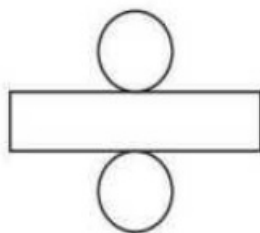


Tick (✓) the face that is opposite the star when the cube is made.

Q6) Oliver makes 3D shapes from these 2D faces.



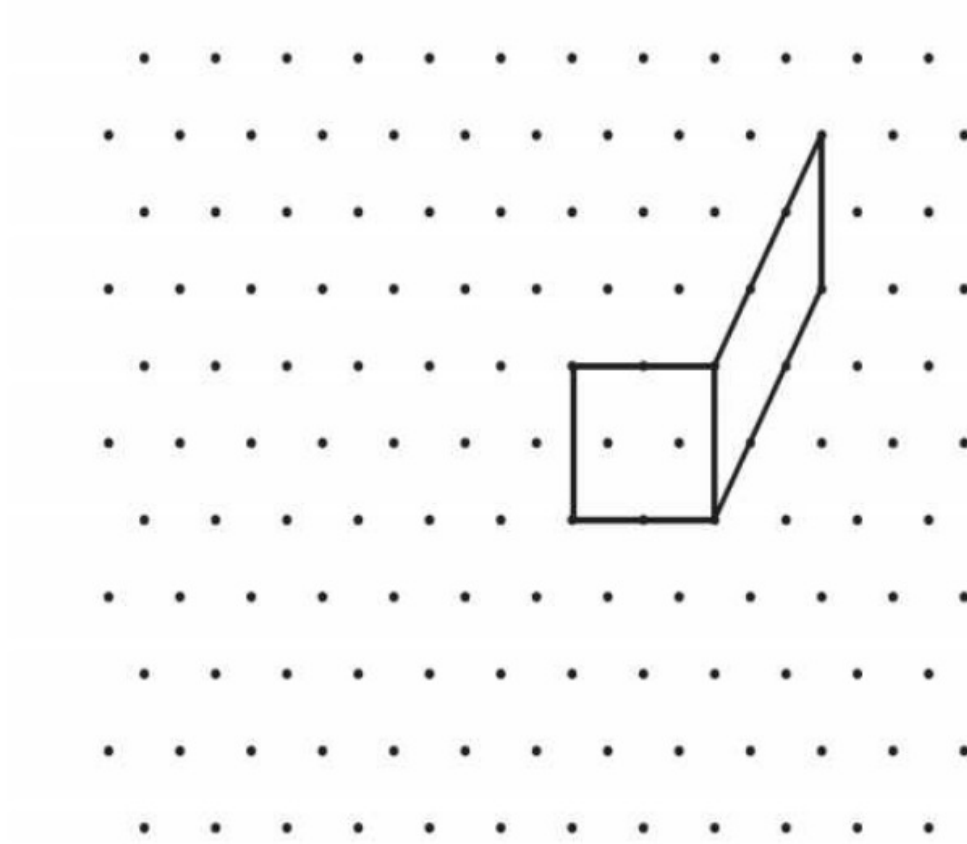
makes a



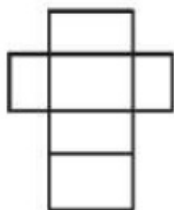
makes a

Write the name of the correct 3D shape on each answer line.

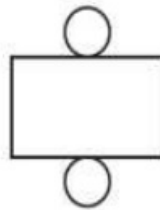
- Q7) Draw **two** more lines to complete the cuboid.
Use a ruler.



- Q8) Samira cuts and unfolds three packets to make flat shapes.
Here are her flat shapes.



cuboid



Write the correct name for the 3D shape of each packet.
One has been done for you.

Q9) Here are two nets of an open cube.

Draw **one** more square on each net to make **two** nets of a closed cube.

Make each net different.

