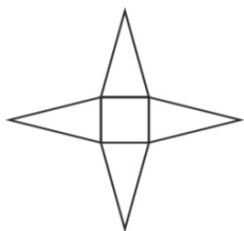


Worksheet B

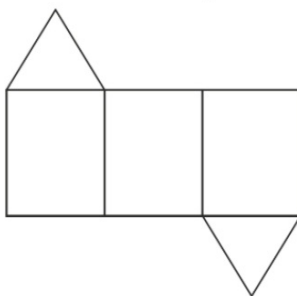
Make Nets of 3D shapes

Activity book p.67

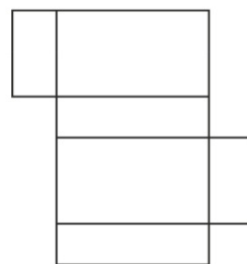
I Match each net to the correct 3D shape.



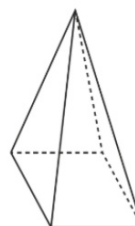
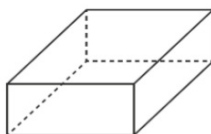
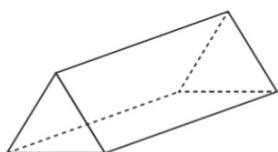
•
•



•
•



•
•



2 Write the 3D shape that each net can form.

Activity book p.68

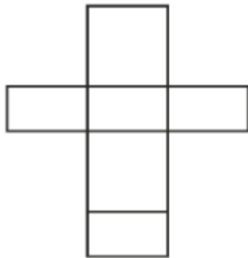
cube

cuboid

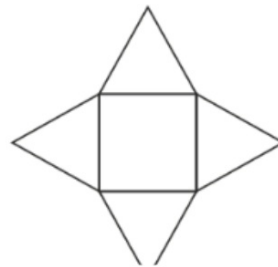
prism

pyramid

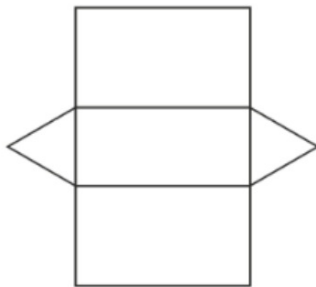
a



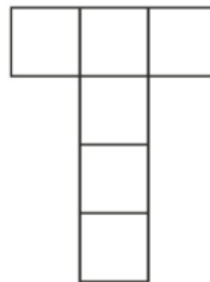
b



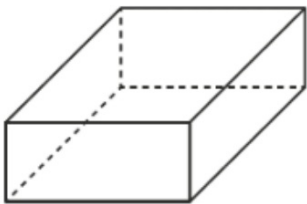
c



d



3 Talia has a box.

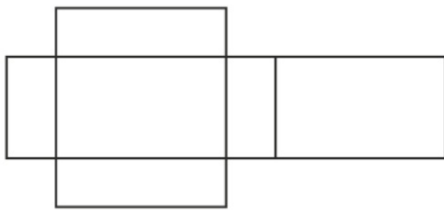


Activity book p.68

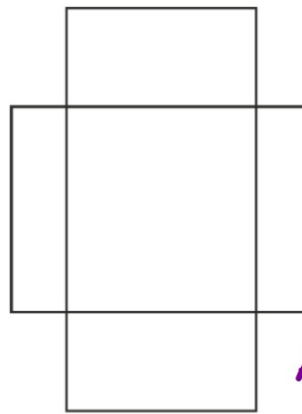
It has the shape of a cuboid. It has _____ flat faces.

She unfolds the box to get a piece of cardboard.

Make a conjecture on the piece of cardboard she will get.



Net C



Net D


Activity book p.69

- 4 a One of the nets below do not make a paper cube.

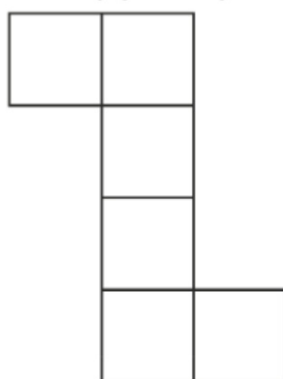


Which net is it? Explain why you say so.


Activity book p.69



Net A



Net B



Net C
