

Round the numbers to the nearest 10:

851

735

Round the numbers to the nearest 100:

449

382

Find the sum of 351 and 289

Calculate $790 - 358$

Tara has 183 books. Seema has 50 fewer toys than Tara. How many toys do they have altogether?

Write the complement of each number to make 100.

53

94

68




77

25


19

8

31

 +  = 400  stands for _____

100 -  = 22  stands for _____

80 -  = 64  stands for _____